

# くりあがりのある たしざん1

がつ

にち

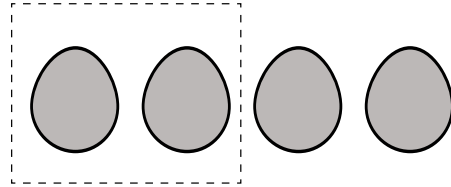
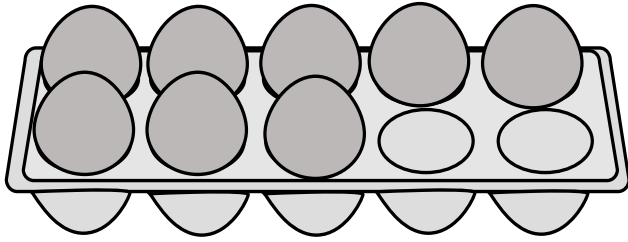
なまえ

---

--	--

□ に たまごの かずを かきましょう。

①



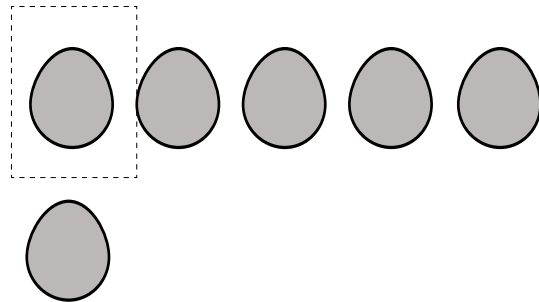
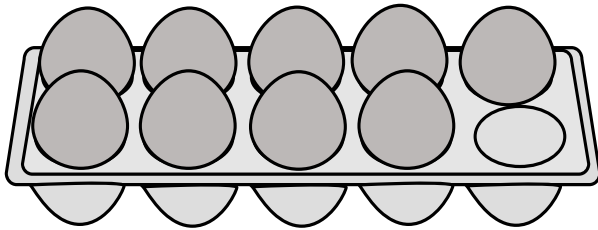
8 + 4 =

こたえ

こ

---

②



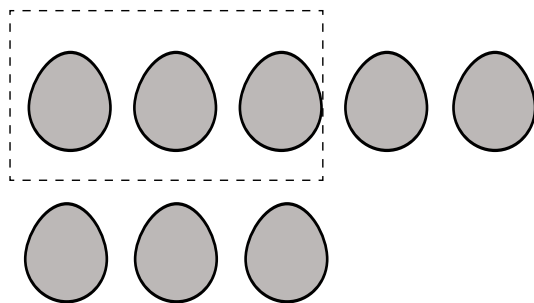
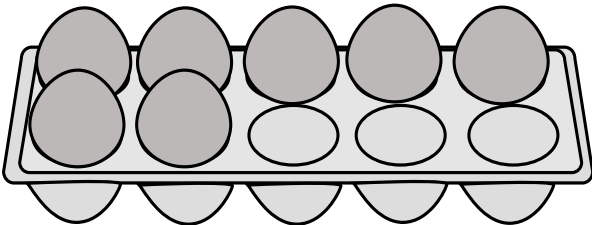
9 + 6 =

こたえ

こ

---

③



7 + 8 =

こたえ

こ

---

こたえ

$$\textcircled{1} \quad 8 + 4 = \boxed{12}$$

---

こたえ            12    こ

$$\textcircled{2} \quad 9 + 6 = \boxed{15}$$

---

こたえ            15    こ

$$\textcircled{1} \quad 7 + 8 = \boxed{15}$$

---

こたえ            15    こ