

くりあがりのある たしざん1

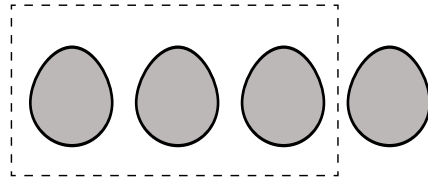
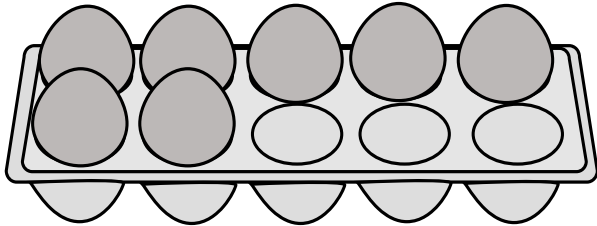
1

がつ にち

なまえ

□ に たまごの かずを かきましょう。

①

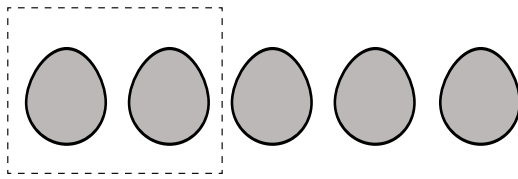
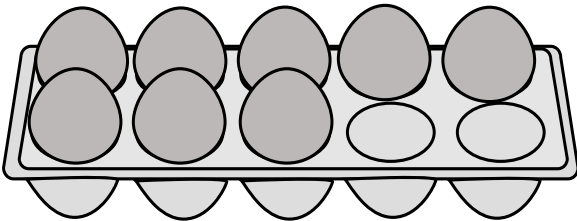


7 + 4 = □

こたえ

こ

②

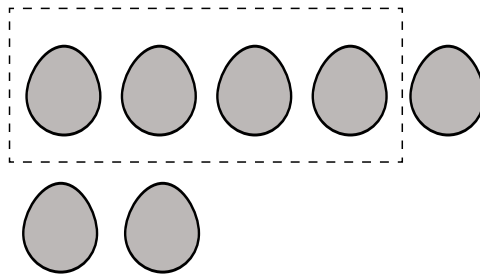
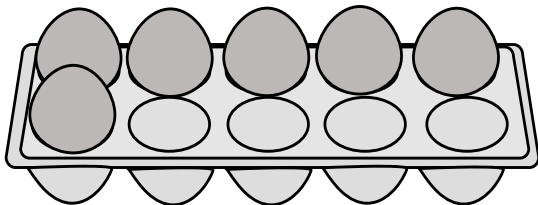


8 + 5 = □

こたえ

こ

③



6 + 7 = □

こたえ

こ

こたえ

$$\textcircled{1} \quad 7 + 4 = \boxed{11}$$

こたえ 11 こ

$$\textcircled{2} \quad 8 + 5 = \boxed{13}$$

こたえ 13 こ

$$\textcircled{1} \quad 6 + 7 = \boxed{13}$$

こたえ 13 こ