

水のかさ 2

NO 3


月 日

名前

点

◆ 右のますは1Lますです。
それぞれの水のかさをもとめましょう。

1L



①

1L

1L

1L

1L


1L



1L

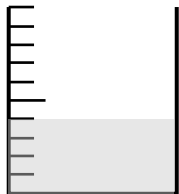
1L

1L






②

1L



③

1L



④

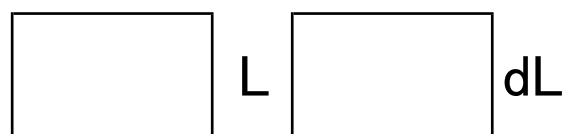



1L

1L

1L

1L

1L



答え

① 8L ② 4dL ③ 8dL

④ 4 L 2 dL