

水のかさ2

NO 2


月 日

名前

点

◆ 右のますは1ℓますです。
 それぞれの水のかさをもとめましょう。

1ℓ




①


1ℓ




1ℓ



1ℓ




ℓ



②

1ℓ

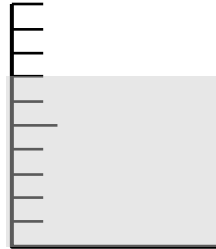


dl




③

1ℓ




dl




④

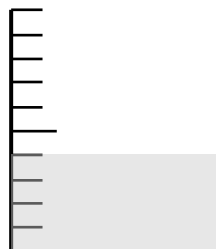
1ℓ



1ℓ



1ℓ



ℓ



dl



答え

① 30 ② 5dℓ ③ 7dℓ

④ 2 0 4 dℓ