

水のかさ2

NO 1


月 日

名前

点

◆ 右のますは1ℓますです。
それぞれの水のかさをもとめましょう。

1ℓ






①

1ℓ

1ℓ

1ℓ


1ℓ



ℓ

②


1ℓ



dl

③

1ℓ



dl

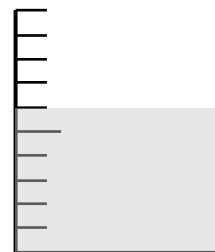



④

1ℓ

1ℓ

1ℓ

1ℓ



ℓ dl

答え

① 4ℓ ② 2dℓ ③ 9dℓ

④ 3 ℓ 6 dℓ